

Adding to 10

Solve the addition problems.



$$4 + 3 =$$



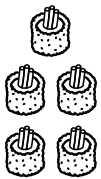
$$2 + 3 =$$




$$3 + 3 =$$




$$7 + 2 =$$



$$1 + 5 =$$



$$3 + 1 =$$



$$8 + 0 =$$



$$5 + 4 =$$