
























CREATE YOUR OWN CHARACTER

Roll a die (1) to decide which features your character gets and then draw them yourself!

If you roll:	ROLL 1 - OUTFIT	ROLL 2 - HEAD	ROLL 3 - FACE	ROLL 4 - ACCESSORY
 OR 				
 OR 				
 OR 				





HELP THE SEALS PREPARE FOR CANADA

The Seals traveled to Calgary for a game. When they arrived, Cam Holding had \$100 in US dollars. In Calgary, they use Canadian dollars. Each US dollar is worth \$1.30 in Canadian dollars.

When Cam exchanged his money, how many Canadian dollars did he receive?

ADVANCED:

When the Seals arrived in Halifax earlier this year, the temperature was 10° Celsius.

What was the temperature in degrees Fahrenheit?


Hint: the formula to calculate degrees Fahrenheit is $T(^{\circ}\text{F}) = (T(^{\circ}\text{C}) \times 9/5) + 32$





CREATE A PICTURE GRAPH AND SOLVE

Use the data of the class vote below to create a picture graph of the students' favorite Seals players:

FAVORITE SEALS PLAYER		
AUSTIN STAATS	CAM HOLDING	WES BERG
		

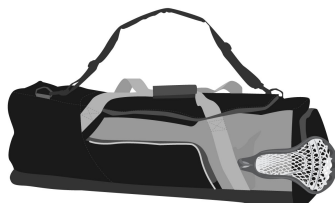

Title _____

Legends _____

1. How many more students voted for Austin Staats than Cam Holding?
2. How many fewer votes are for Austin Staats than Cam Holding and Wes Berg?



HELP KYLE BUCHANAN FIND HIS BAG





COLOR IN SALTY

Write on Salty's sign what you miss most about Seals games!





CAN YOU FIND THE 5 DIFFERENCES?

Original





ANSWER KEY

HELP CAM HOLDING CONVERT HIS MONEY

1. 130.00
2. 50° Fahrenheit

CREATE A PICTURE GRAPH AND SOLVE

1. 5 students
2. 1 student